

Level2

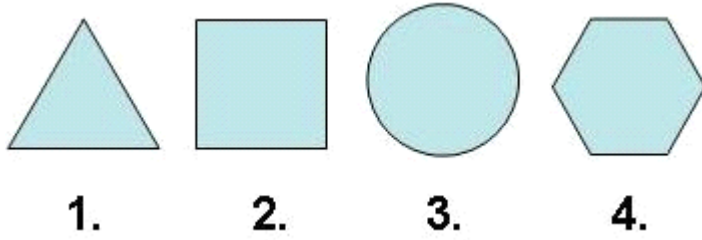
For office use only														
A1	Individual questionnaire number							A2	Household questionnaire number					
A3	Household control sheet number							A4	Pcode from household roster					

- $(11 - 5) + 2 \times (21 - 17) =$
a) -2
b) 10
c) 14
d) 31
- What is the place value of 7 in 738 / Liyini inani ngesikhundla le-7 kuma-738
a) 1
b) 10
c) 100
d) 1000
- $4 \times 7 =$
a) 4
b) 7
c) 18
d) 28
- If $3 + ? = 16$, which number should replace? / Uma ngabe $3 + ? = 16$, yiyiphi inombolo ezokuma endweni yophawu ?
a) 10
b) 11
c) 13
d) 24
- Which number continues the pattern /Yiyiphi inombolo eqhubekisa iphethini?


1 2 2 3 3 3 4 4 4 4 ?

- 4
- 5
- 6
- 7

6. Which shape is the odd one out? / Yisiphi isimo esingafanelekile ukuba nezinye?



7. What is the time difference between these two watches? / Yini umehluko ngaphakathi kwalawa mawashi amabili?



- a) 4 min
- b) 1 h 4 min
- c) 6 min
- d) 1 h 6 min

8. Which one is the heaviest? / Yiyiphi esinda kakhulu?



a)



b)



c)




d)

9. 1cm = ?

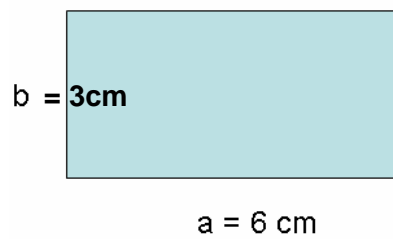
- a) 10 mm
- b) 100 mm
- c) 1000 mm
- d) 10000 mm

10. How many sides does this object have? / Kungabe lesi simo sinamacala amangaki?




- a) 4
- b) 5
- c) 6
- d) 7

11. If $a = 6\text{ cm}$ and $b = 3\text{ cm}$ find the perimeter of the rectangle below. / Uma ngabe u- $a = 6\text{ cm}$ kanti u- $b = 3\text{ cm}$ thola ipherimitha yonxande ongezansi.



- a) 9 cm
- b) 12 cm
- c) 15 cm
- d) 18 cm

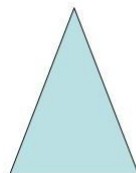
12. If this cylinder was cut using a vertical plane. / Uma ngabe lesilinda isikwe kusetshenziswa ipuleni emile.



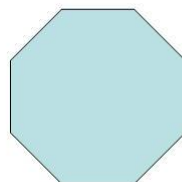
What would be the shape of the cut surface? / Kuzakuba yisiphi isimo sendawo esikiwe?




a)



b)



c)



d)

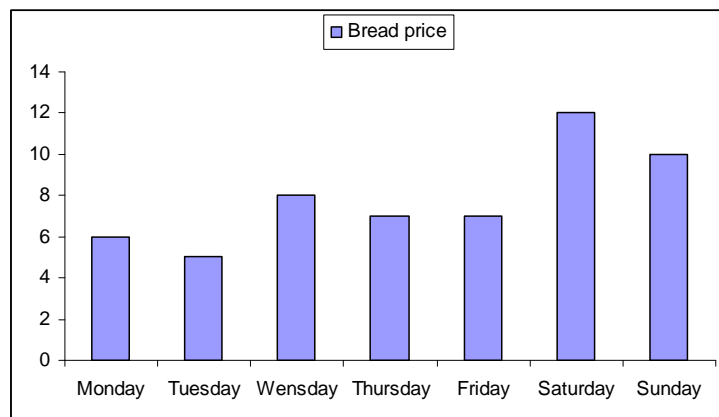
13. Which city had the hottest temperature? / Yiliphi idolobha elalinezinga lokushisa eliphezulu kakhulu kabi?

City/Idolobha	Temperature ° C / Izinga Lokushisa nge- ° C
Cape Town/ IKapa	25
Johannesburg / IGoli	24
Harare / I-Harare	20
Nairobi / INayirobhi	22

- a) Cape Town
b) Johannesburg
c) Harare
d) Nairobi
14. Find the mean (average) of the following series of numbers: / Thola indawo ephakathi (i-avareji) yohlu lwezimbombo ezilandelayo:
13, 17, 20, 40, 40

- a) 20
b) 26
c) 30
d) 40

15. Which day is best to buy the bread/Yiluphi usuku olungcono kakhulu lokuthi uthenge isinkwa?



- a) Monday
b) Tuesday
c) Thursday
d) Sunday